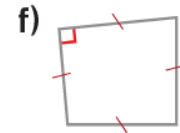
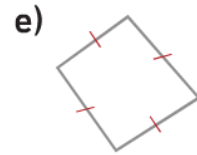
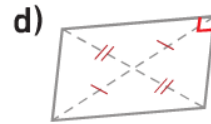
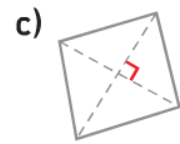
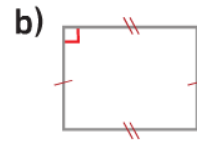
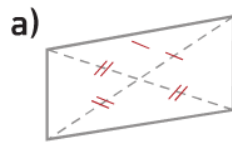


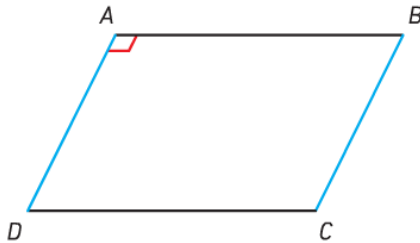
Exercice 1 :

Donner la nature des quadrilatères ci-contre.

Justifier la réponse.



Exercice 2 :



Le quadrilatère ABCD est un parallélogramme.

Démontrer que ABCD est un rectangle.

Justifier la réponse.